

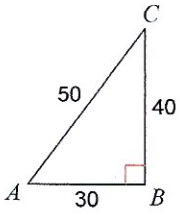
Ch 8 Trig Quiz

Name _____

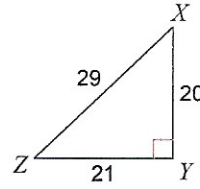
Class _____

Find the value of each trigonometric ratio.

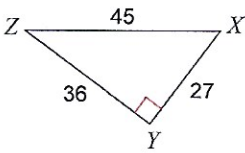
1) $\cos C$



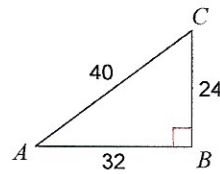
2) $\sin Z$



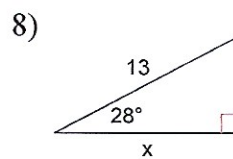
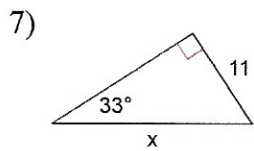
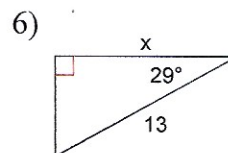
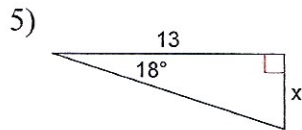
3) $\sin Z$



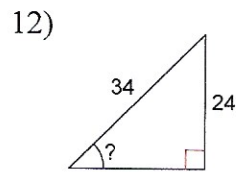
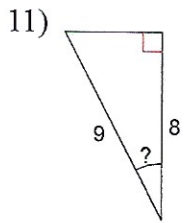
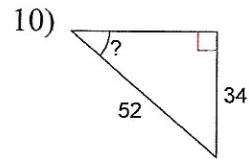
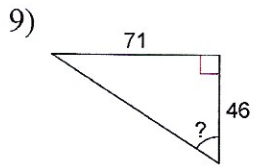
4) $\tan C$



Find the missing side. Round to the nearest tenth.



Find the measure of the indicated angle to the nearest degree.



Make a sketch and solve.

- 13) Find the angle of elevation to the peak of a mountain for an observer who is 155 meters from the mountain and the mountain is 350 meters tall.