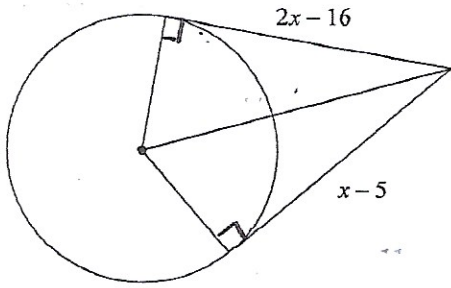


Practice Problems.

Solve for x.

#1

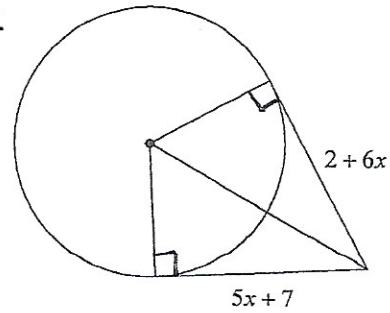


$$2x - 16 = x - 5$$

$$2x - x = 16 - 5$$

$$x = \boxed{11}$$

#2

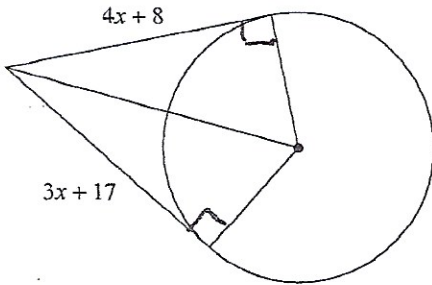


$$5x + 7 = 2 + 6x$$

$$7 - 2 = 6x - 5x$$

$$\boxed{5} = x$$

#3

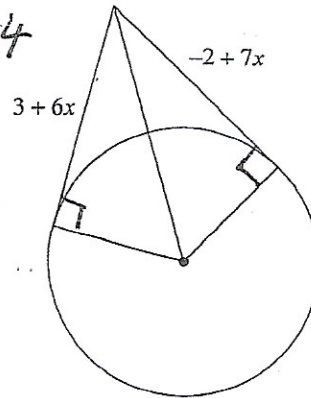


$$4x + 8 = 3x + 17$$

$$4x - 3x = 17 - 8$$

$$x = \boxed{9}$$

#4



$$3 + 6x = -2 + 7x$$

$$3 + 2 = 7x - 6x$$

$$\boxed{5} = x$$